





UKG Math Question Paper

1. Write 'M' for More and 'L' for Less



2. Write 'M' for Many, 'F' for Few, 'O' for one, 'N' for None



3. Circle the correct answer

This is bigger

Cow

Dog

This is heavier

A book


A paper

This is taller


Tree

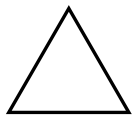
Grass

4. Write the names of the following shapes










5. Write the odd numbers from 1-10

6. Match the following



Triangle

Circle

Rectangle

Oval

7. Answer the following

37 comes in between _____ and _____

78 comes after _____

99 comes before _____

50 comes in between _____ and _____

20 comes after _____

89 comes before _____

8. Give 2 examples each for the following

Square:

Circle:

Rectangle:

Triangle:

Oval:

9. Draw an Oval shape

10. Write the following numbers in words

14

96

11

49

100

11. Add the following

$$7 + 2 = \underline{\hspace{2cm}}$$


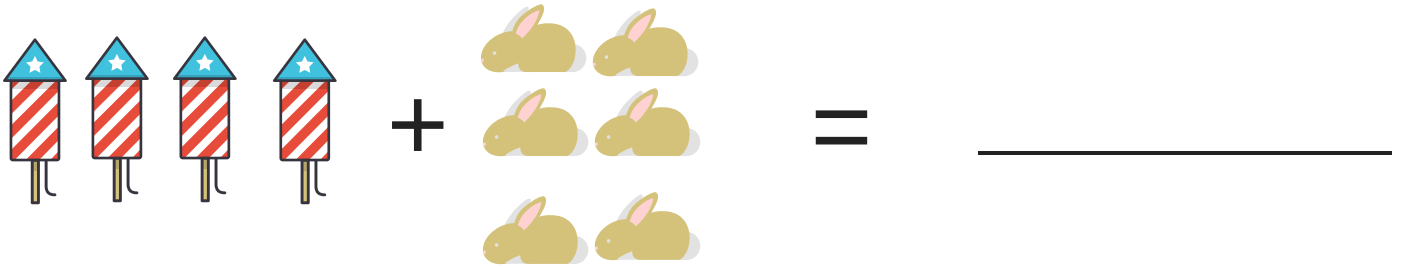
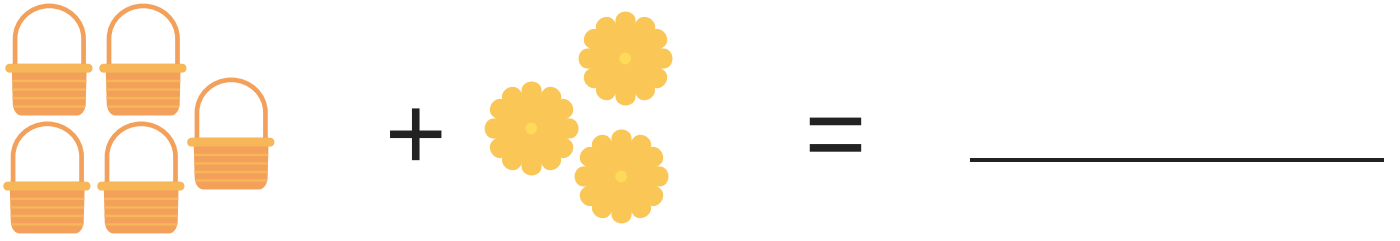
$$3 + 3 = \underline{\hspace{2cm}}$$

$$4 + 3 = \underline{\hspace{2cm}}$$

$$1 + 5 = \underline{\hspace{2cm}}$$

$$6 + 2 = \underline{\hspace{2cm}}$$

12. Add the following



13. Write '>' or '<'

23 _____ 32

9 _____ 99

11 _____ 81

73 _____ 37

56 _____ 62

19 _____ 29